



Measure the width of each block in inches and in centimeters.

Ex)



Exin. 3 1/2

Excm. 8 - 9

1)



1in. _____

1cm. _____

2)



2in. _____

2cm. _____

3)



3in. _____

3cm. _____


4)



4in. _____

4cm. _____

5)



5in. _____

5cm. _____

6)



6in. _____

6cm. _____

7)



7in. _____

7cm. _____

8)



8in. _____

8cm. _____

9)



9in. _____

9cm. _____

Answers

Exin. 3 1/2

Excm. 8 - 9

1in. _____

1cm. _____

2in. _____

2cm. _____

3in. _____

3cm. _____

4in. _____

4cm. _____

5in. _____

5cm. _____

6in. _____

6cm. _____

7in. _____

7cm. _____

8in. _____




8cm. _____

9in. _____

9cm. _____



Measure the width of each block in inches and in centimeters.



Answers

Exin. 3 1/2

Excm. 8 - 9

1in. 2

1cm. 5 - 6

2in. 1

2cm. 2 - 3

3in. 4

3cm. 10 - 11

4in. 4 1/2

4cm. 11 - 12

5in. 0 1/2

5cm. 1 - 2

6in. 2 1/2

6cm. 6 - 7

7in. 1 1/2

7cm. 3 - 4

8in. 5 1/2

8cm. 13 - 14

9in. 5

9cm. 12 - 13